

**FREE
FALL AND
SPRING
MATH TESTS
GRADE 1**



Name: _____

1. Write the numbers 1 through 24:

_____/ _____/ _____/ _____/ _____/ _____/

_____/ _____/ _____/ _____/ _____/ _____/

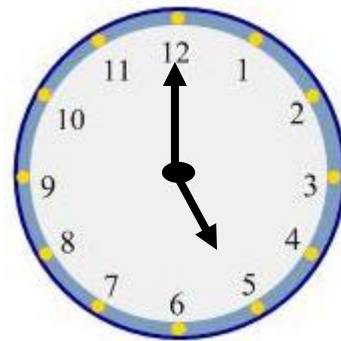
_____/ _____/ _____/ _____/ _____/ _____/

_____/ _____/ _____/ _____/ _____/ _____/

2. What time is shown on the clocks?

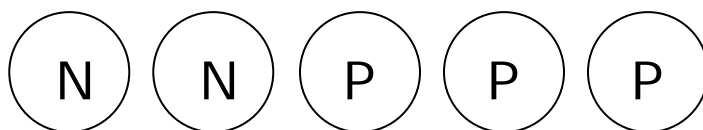


_____ o'clock



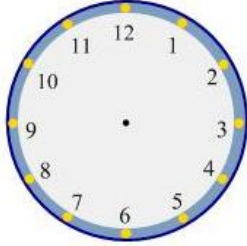
_____:_____

3. How much money does Max have?

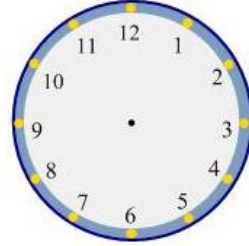


_____ cents

4. Draw the hour and minute hands on these clocks:



4:00 PM



7 o'clock

5. Circle the dimes:



6. Circle the penny:



7. How many tallies: _____



8. Make tallies for 9: _____

9. Draw 14 X's:

10. Sue has 6 rocks. John has 4 rocks.
How many rocks do they have
altogether?

11. Juan has 9 baseball cards. He gives
5 cards to Sally. How many cards
does Juan have now?

12. Fill in the missing numbers:

____, 2, 3, _____, _____, _____

13. Fill in the missing numbers:

2, _____, _____, _____, 10, 12, 14

14. Write by 5's:

_____ / _____ / _____ / _____ / _____ /

_____ / _____ / _____ / _____ / _____ /

_____ / _____ / _____ / _____ / _____ /

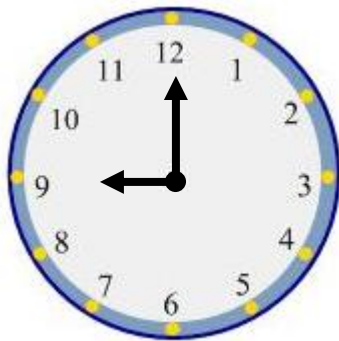
_____ / _____ / _____ / _____ / _____ /

Name: _____

1. Write the numbers 1 through 24:

 1 , 2 , 3 , 4 , 5 , 6 ,
 7 , 8 , 9 , 10 , 11 , 12 ,
13 , 14 , 15 , 16 , 17 , 18 ,
19 , 20 , 21 , 22 , 23 , 24 ,

2. What time is shown on the clocks?

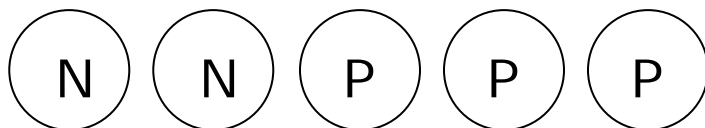


 9 o'clock



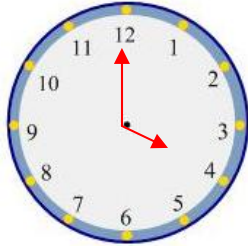
 5:00

3. How much money does Max have?

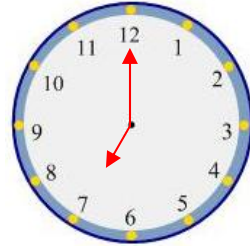


 13 cents

4. Draw the hour and minute hands on these clocks:



4:00 PM



7 o'clock

5. Circle the dimes:



6. Circle the penny:



7. How many tallies:



8. Make tallies for 9:



9. Draw 14 X's:

XXXXXXXXXX
XXXXXXXXXX

10. Sue has 6 rocks. John has 4 rocks.
How many rocks do they have
altogether? 10

Add point for math sentence: $6 + 4 = 10$

11. Juan has 9 baseball cards. He gives
5 cards to Sally. How many cards
does Juan have now? 4

Add point for math sentence: $9 - 5 = 4$

12. Fill in the missing numbers:

__1__, 2, 3, __4__, __5__, __6__

13. Fill in the missing numbers:

2, __4__, __6__, __8__, 10, 12, 14

14. Write by 5's:

5, 10, 15, 20, 25,
30, 35, 40, 45, 50,
55, 60, 65, 70, 75,
80, 85, 90, 95, 100



Grade 1 Math Test



Name _____ Date _____

Teacher _____

Page 1: Counting and Tallying

_____ of 20

1. 17, 18, 19, 20, 21, 22

2. 30, 40, 50, 60, 70, 80

3. 45, 50, 55, 60, 65, 70

4. 26, 28, 30, 32, 34, 36


5. 88, 89, 90, 91, 92, 93

Make the tallies for these numbers:

6. 8

7. 11


8. 23



Show the numbers for these tallies:

9. _____ 15 _____

10. _____ 6 _____





Page 2: Addition and Subtraction

_____ of 10

Add

1. $6 - 4 = \underline{2}$

2. $9 + 3 = \underline{12}$ 3. $25 + 10 = \underline{35}$

4.
$$\begin{array}{r} 9 \\ + 4 \\ \hline \end{array}$$

13

5.
$$\begin{array}{r} 8 \\ + 5 \\ \hline \end{array}$$

13

Subtract

6. $9 - 2 = \underline{7}$


7. $8 - 3 = \underline{5}$

8. $54 - 10 = \underline{44}$

9. $9 - 5 = \underline{4}$

10.
$$\begin{array}{r} 18 \\ - 9 \\ \hline \end{array}$$

9









Page 3: Money

Write the value of each coin in the bank. (Value means how much it is worth.)

<p>1.</p>  <p>_____ 10¢ _____</p>	<p>2.</p>  <p>_____ 25¢ _____</p>
<p>3.</p>  <p>_____ 5¢ _____</p>	<p>4.</p>  <p>_____ 1¢ _____</p>



Write the value of each group of coins on the line.

<p>5.</p>  <p>_____ 13¢ _____</p>	<p>6.</p>  <p>_____ 18¢ _____</p>
<p>7.</p>  <p>_____ 95¢ _____</p>	<p>8.</p>  <p>_____ 43¢ _____</p>






_____ of 4

1. Using your ruler, how many inches long is this arrow?



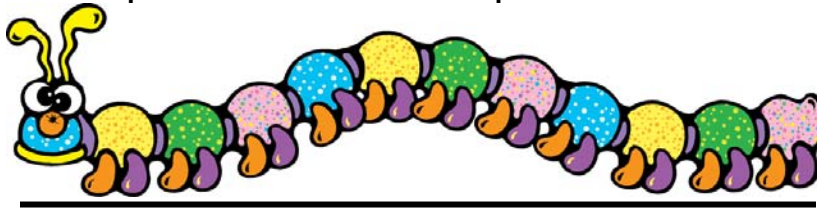
___4___ inches

2. Using your ruler, how many inches long is this picture of a fish?



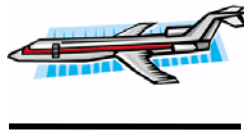
___2___ inches

3. Using your ruler, how many centimeters long is this picture of a caterpillar?



___11___ cm













4. Using your ruler, how many centimeters long is this picture of an airplane?



___3___ cm



Ocean Graph

Whale				
Clown Fish				
Orca				
Shark				

1. How many more Orcas than whales? 3
2. How many fewer whales than sharks? 3
3. How many Orcas and sharks in all? 6

Tally Marks

Make tallies for 36: |||| | |||| | |||| | |||| | |||| | |||| |

Make tallies for 18: |||| | |||| | |||| | |||

Total: _____ of 47



Grade 1 Math Test



Name _____ Date _____

Teacher _____

Page 1: Counting and Tallying

_____ of 20

1. 17, 18, 19, _____, _____, _____

2. 30, 40, 50, _____, _____, _____

3. 45, 50, 55, _____, _____, _____

4. 26, 28, 30 _____, _____, _____


5. 88, 89, 90, _____, _____, _____

Make the tallies for these numbers:

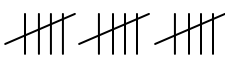
6. 8 _____

7. 11 _____


8. 23 _____



Show the numbers for these tallies:

9.  _____

10.  _____





Page 2: Addition and Subtraction

_____ of 10

Add

5. $6 - 4 =$ _____

6. $9 + 3 =$ _____ 3. $25 + 10 =$ _____

5.
$$\begin{array}{r} 9 \\ + 4 \\ \hline \end{array}$$

5.
$$\begin{array}{r} 8 \\ + 5 \\ \hline \end{array}$$

Subtract


6. $9 - 2 =$ _____

7. $8 - 3 =$ _____

8. $54 - 10 =$ _____

9. $9 - 5 =$ _____





10.
$$\begin{array}{r} 18 \\ - 9 \\ \hline \end{array}$$









Page 3: Money

Write the value of each coin in the bank. (Value means how much it is worth.)

<p>1.</p>  <p>_____</p>	<p>2.</p>  <p>_____</p>
<p>3.</p>  <p>_____</p>	<p>4.</p>  <p>_____</p>



Write the value of each group of coins on the line.


<p>5.</p>  <p>_____</p>	<p>6.</p>  <p>_____</p>
<p>7.</p>  <p>_____</p>	<p>8.</p>  <p>_____</p>






_____ of 4

1. Using your ruler, how many inches long is this arrow?



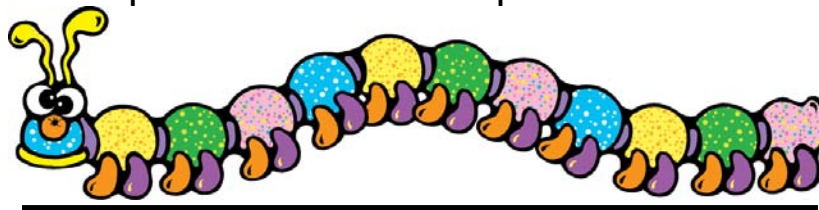
_____ inches

3. Using your ruler, how many inches long is this picture of a fish?



_____ inches

7. Using your ruler, how many centimeters long is this picture of a caterpillar?



_____ cm













8. Using your ruler, how many centimeters long is this picture of an airplane?



_____ cm



Ocean Graph

Whale				
Clown Fish				
Orca				
Shark				

4. How many more Orcas than whales? _____

5. How many fewer whales than sharks? _____

6. How many Orcas and sharks in all? _____

Tally Marks

Make tallies for 36: _____

Make tallies for 18: _____

Total: _____ of 47