

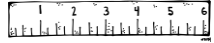
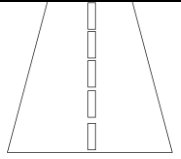










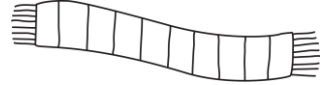
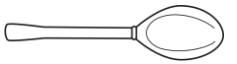






Capacity or Length?

Name _____ Date _____

Check whether each picture is of capacity or length:

 ___ capacity ___ length	 ___ capacity ___ length	 ___ capacity ___ length	 ___ capacity ___ length
 ___ capacity ___ length	 ___ capacity ___ length	 ___ capacity ___ length	 ___ capacity ___ length
 ___ capacity ___ length	 ___ capacity ___ length	 ___ capacity ___ length	 ___ capacity ___ length
 (the boat) ___ capacity ___ length	 ___ capacity ___ length	 ___ capacity ___ length	 ___ capacity ___ length
 (cup) ___ capacity ___ length	 ___ capacity ___ length	 ___ capacity ___ length	 ___ capacity ___ length

Fill in the blanks:

Capacity is the _____ a container can hold.

Capacity is the amount a _____ can hold.



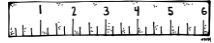
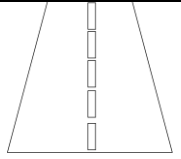










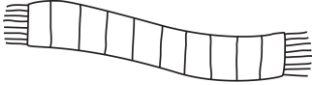
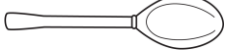




Length is how long or _____ something is.

Length is how _____ or tall something is.

Capacity or Length?

Name _____ Date _____

Check whether each picture is of capacity or length:

 ___x___ capacity ___ length	 ___x___ capacity ___ length	 ___ capacity ___x___ length	 ___ capacity ___x___ length
 ___ capacity ___x___ length	 ___x___ capacity ___ length	 ___x___ capacity ___ length	 ___ capacity ___x___ length
 ___ capacity ___x___ length	 ___x___ capacity ___ length	 ___ capacity ___x___ length	 ___ capacity ___x___ length
 (the boat) ___ capacity ___x___ length	 ___ capacity ___x___ length	 ___ capacity ___x___ length	 ___x___ capacity ___ length
 (cup) ___x___ capacity ___ length	 ___ capacity ___x___ length	 ___ capacity ___x___ length	 ___x___ capacity ___ length

Fill in the blanks:

Capacity is the **amount** a container can hold.

Capacity is the amount a **container** can hold.

Length is how long or **tall** something is.

Length is how **long** or tall something is.



The original downloader/purchaser of this document is granted permission to copy for teaching purposes only. If you are NOT the original purchaser, please download the item from my store/blog/web site before making any copies. Redistributing, editing, selling, or posting this item or any part thereof on the Internet are strictly prohibited without first gaining permission from the author. Violations are subject to the penalties of the Digital millennium Copyright Act.



The graphics in this lesson came from many clip art shops online. It is a violation of copyright laws to remove the graphics from this presentation for other uses.

If you wish to use these graphics for yourself, you can find them by visiting <http://frompond.blogspot.com> or the other stores and following the links provided to the graphics store. Thank you for respecting copyright laws and the artists that created them.

The artist retain all art copyrights and Wise Owl Factory has a single user license.



Lettering Delights

Scrappin' Doodles

[Scrapping Doodles Licenses #50089](#), [#54476](#), [#60204](#), [#52613](#), [#63188](#), [#63188_C](#), [#63543C](#)

